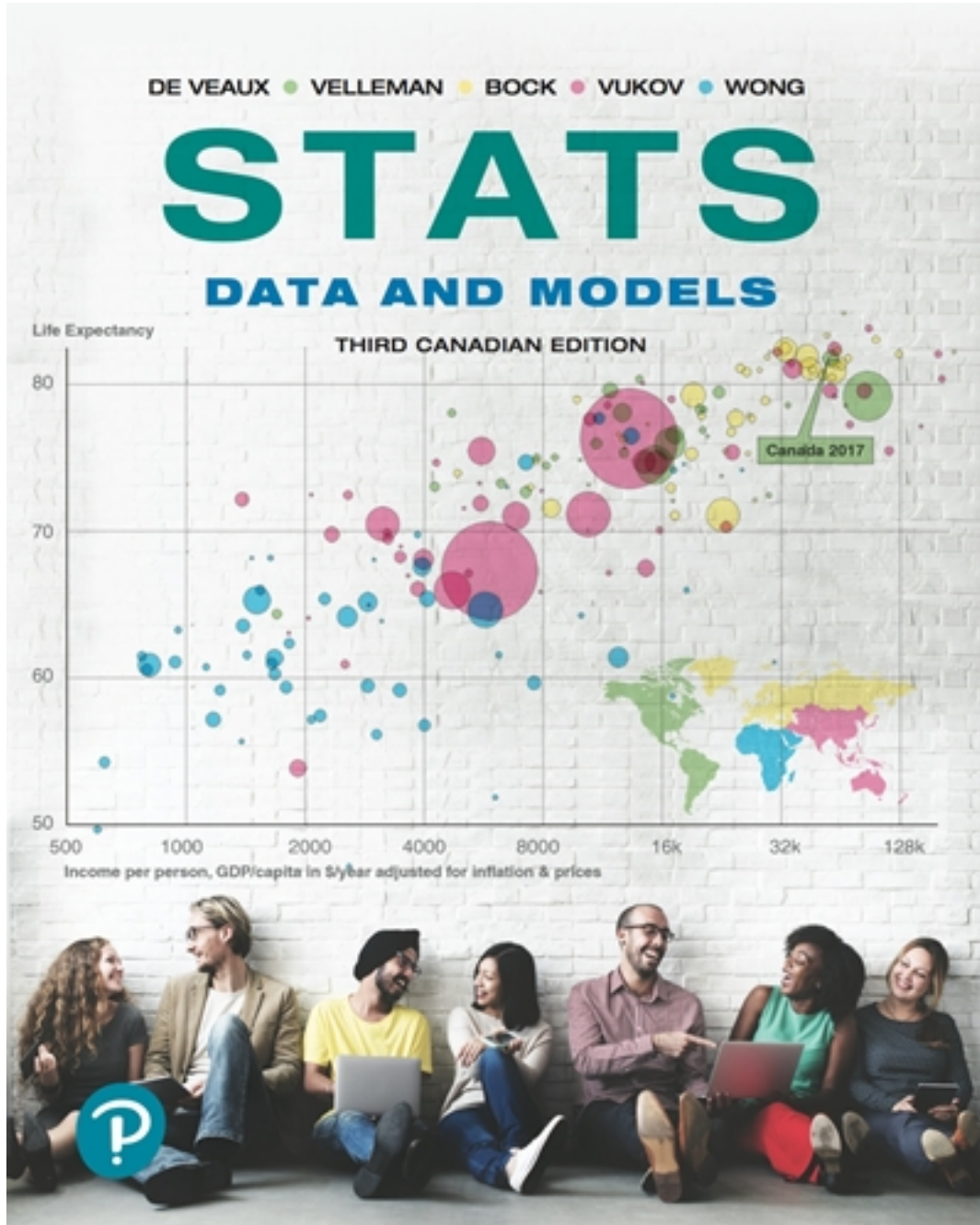


# Test Bank for Stats Data and Models 3rd Edition by Veaux

[CLICK HERE TO ACCESS COMPLETE Test Bank](#)



# Test Bank

*Statistics: Data and Models, Cdn. Ed., 3e (De Veaux)*

**Chapter 2 Displaying and Describing Categorical Data**

**2.1 Summarizing and Displaying a Single Categorical Variable**

1) Of the 1470 applicants to a college program, 760 were accepted, 269 were wait-listed, and 441 were turned away for lack of space. Find the relative frequency distribution of the decisions made, and write a sentence describing it.

A) 1470 students applied for admission to the college program. 52% were accepted, 18% were wait-listed, and 30% were turned away.

B) 1470 students applied for admission to the college program. 52% were accepted, and 48% were turned away.

C) 1470 students applied for admission to the college program. 52% were accepted, 35% were wait-listed, and 30% were turned away.

D) 1470 students applied for admission to the college program. 52% were accepted, 35% were wait-listed, and 58% were turned away.

E) 1470 students applied for admission to the college program. 70% were accepted, and 30% were turned away.

Answer: A

Diff: 1 Type: BI

Objective: (2.1) Find Relative Frequency Distribution

2) Of the 1606 applicants to a college program, 456 were Black or Hispanic, 300 were Asian, and 850 were White. Summarize the relative frequency distribution of ethnicity with a sentence or two in the proper context.

A) Of the 1606 students who applied for admission to the college program, 3% were Black or Hispanic, 2% were Asian, and 5% were White.

B) Of the 1606 students who applied for admission to the college program, 54% were Black or Hispanic, 35% were Asian, and 53% were White.

C) Of the 1606 students who applied for admission to the college program, 14% were Black, 14% were Hispanic, 19% were Asian, and 53% were White.

D) Of the 1606 students accepted in the college program, 28% were Black or Hispanic, 19% were Asian, and 53% were White.

E) Of the 1606 students who applied for admission to the college program, 28% were Black or Hispanic, 19% were Asian, and 53% were White.

Answer: E

Diff: 1 Type: BI

Objective: (2.1) Find Relative Frequency Distribution

3) Statistics Canada gives the following mortality data for Canada in 2013.

Cause of Death	Percent
Cancer	29.8
Heart disease	19.8
Stroke	5.3
Respiratory diseases	4.7
Accidents	4.5

Is it reasonable to conclude that cancer or accidents were the cause of approximately 34.3% of deaths in 2013?

- A) No, because the percentages do not add up to 100%.
- B) Yes, because these categories do not overlap.
- C) Yes, because the percentages can always be added in relative frequency tables.
- D) No, because the percentages in relative frequencies tables can never be added.
- E) No, because these categories overlap.

Answer: B

Diff: 1 Type: BI

Objective: (2.1) Interpret Relative Frequency Table

4) Statistics Canada gives the following mortality data for Canada in 2013.

Cause of Death	Percent
Cancer	29.8
Heart disease	19.8
Stroke	5.3
Respiratory diseases	4.7
Accidents	4.5

What percent of deaths were from causes not listed here?

- A) 58.5%
- B) 35.9%
- C) 36%
- D) 64.1%
- E) The percent cannot be determined from the given percentages because the categories overlap.

Answer: B

Diff: 1 Type: BI

Objective: (2.1) Interpret Relative Frequency Table

5) The City of Windsor Department of Parks and Recreation is planning to build a recreation centre in one of the city's parks. They conducted a poll to find out the types of physical activities the local population would be interested in. The poll was based on telephone responses from 1013 randomly selected adults. The table shows the percentages of people who expressed interest in various activities.

Activity	Percent
Running/Walking	56
Weight Training	45
Biking	34
Aerobics	25
Swimming	16

Is it reasonable to conclude that 59% expressed interest in either biking or aerobics?

- A) Yes, because these categories do not overlap.
- B) No, because the poll is not based on a large-enough number of individuals.
- C) No, because these categories overlap.
- D) No, because the percentages in relative frequencies tables can never be added.
- E) Yes, because the percentages can always be added in relative frequency tables.

Answer: C

Diff: 1 Type: BI

Objective: (2.1) Interpret Relative Frequency Table

6) The City of Windsor Department of Parks and Recreation is planning to build a recreation centre in one of the city's parks. They conducted a poll to find out the types of physical activities the local population would be interested in. The poll was based on telephone responses from 1013 randomly selected adults. The table shows the percentages of people who expressed interest in various activities.

Activity	Percent
Running/Walking	58
Weight Training	50
Biking	34
Aerobics	24
Swimming	13

What percent of adults polled did not express interest in any of these activities?

- A) 21%
- B) 179%
- C) 79%
- D) 90%
- E) The percent cannot be determined from the given percentages because the categories overlap.

Answer: E

Diff: 1 Type: BI

Objective: (2.1) Interpret Relative Frequency Table

7) A newspaper surveyed its subscribers as to which section of the paper they read first. The results are listed below.

Section	Percent
Front page	18.3
Sports	25.2
Business	13.9
Comics	22.1
Horoscope	13.7

Is it reasonable to conclude that 39.1% of the paper's subscribers read the business or sports sections first?

- A) Yes, because the percentages can always be added in relative frequency tables.
- B) No, because the percentages in relative frequencies tables can never be added.
- C) No, because the percentages do not add up to 100%.
- D) No, because these categories overlap.
- E) Yes, because these categories do not overlap.

Answer: E

Diff: 1 Type: BI

Objective: (2.1) Interpret Relative Frequency Table

8) A newspaper surveyed its subscribers as to which section of the paper they read first. The results are listed below.

Section	Percent
Front page	18.3
Sports	25.2
Business	13.9
Comics	22.1
Horoscope	13.7

What percent of subscribers read a section of the paper not listed above first?

- A) 6.8%
- B) 4.7%
- C) 7.2%
- D) 8.3%
- E) The percent cannot be determined from the given percentages because the categories overlap.

Answer: A

Diff: 1 Type: BI

Objective: (2.1) Interpret Relative Frequency Table

9) A poll asked adults which activities they had engaged in during the past month. The results are listed below.

Activity	Percent
Dinner out	55.7
Sporting event	15.9
Movie	45.6
Stroll	5.1

Is it reasonable to conclude that 61.5% of those polled had seen a movie or gone to a sporting event during the past month?

- A) Yes, because these categories do not overlap.
- B) No, because the percentages in relative frequencies tables can never be added.
- C) Yes, because the percentages can always be added in relative frequency tables.
- D) No, because these categories overlap.
- E) No, because the poll is not based on a large enough number of individuals.

Answer: D

Diff: 1 Type: BI

Objective: (2.1) Interpret Relative Frequency Table

10) A real estate company kept a database on the apartments in a certain city. The percentages of various types of apartments are listed below.

Type	Percent
Studio	15.9
1-bedroom	25.5
2-bedroom	45.8
3-bedroom	10.1

What percentage of the apartments in the city are 1-bedroom or 2-bedroom apartments?

- A) 69.9%
- B) 69.4%
- C) 71.3%
- D) 73.3%
- E) The percent cannot be determined from the given percentages because the categories overlap.

Answer: C

Diff: 1 Type: BI

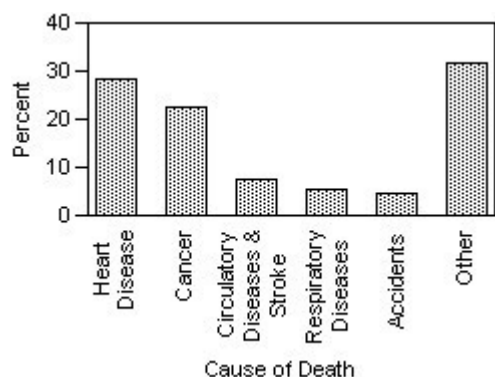
Objective: (2.1) Interpret Relative Frequency Table

11) The Centers for Disease Control in the U.S.A. lists causes of death for individual states in 2002. The mortality data for the five leading causes of death for one state is given.

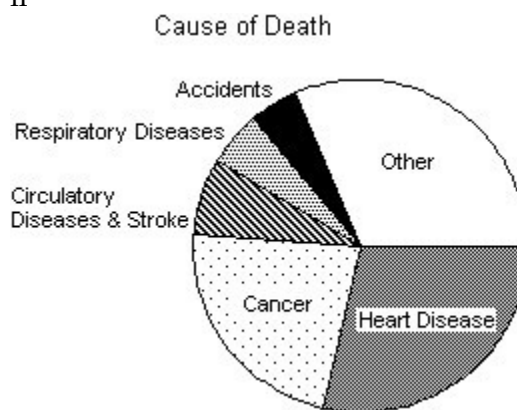
Cause of Death	Percent
Heart Disease	28.5%
Cancer	23.2%
Circulatory diseases and stroke	7.5%
Respiratory diseases	5.5%
Accidents	4.8%

Which of the following displays is/are appropriate to describe the data for all causes of death? (More than one display may be appropriate.)

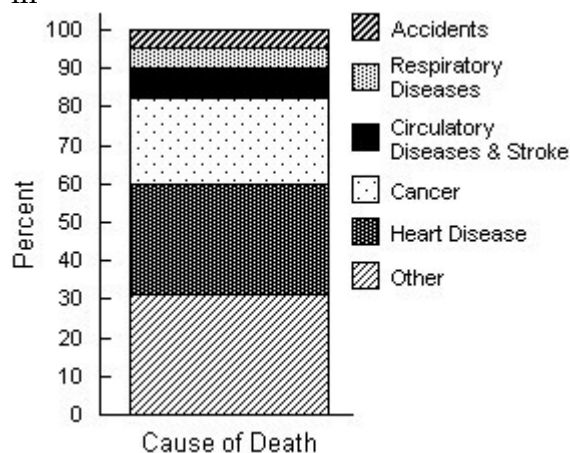
I



II



III



- A) II, III  
 B) I, II, III  
 C) I  
 D) I, II  
 E) None of these displays are appropriate.

Answer: B

Diff: 2 Type: BI

Objective: (2.1) Determine Appropriate Display for Data

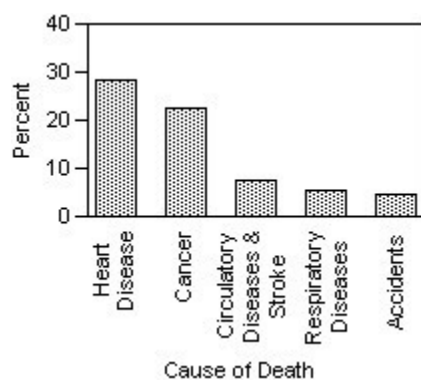


12) The Centers for Disease Control in the U.S.A. lists causes of death for individual states in 2002. The mortality data for the five leading causes of death for one state is given.

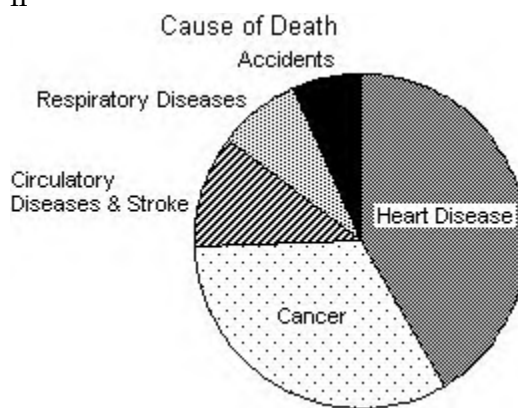
Cause of Death	Percent
Heart Disease	28.5%
Cancer	23.2%
Circulatory diseases and stroke	7.5%
Respiratory diseases	5.5%
Accidents	4.8%

Which of the following displays is/are appropriate to describe the data for all causes of death? (More than one display may be appropriate.)

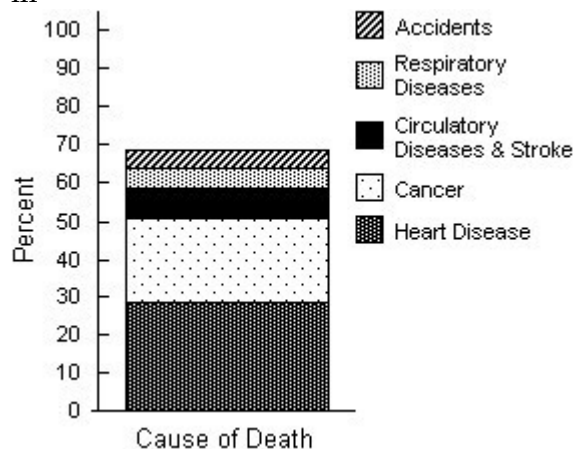
I



II



III



A) I, II

B) I

C) I, III

D) I, II, III

E) None of these displays are appropriate.

Answer: E

Diff: 2 Type: BI

Objective: (2.1) Determine Appropriate Display for Data

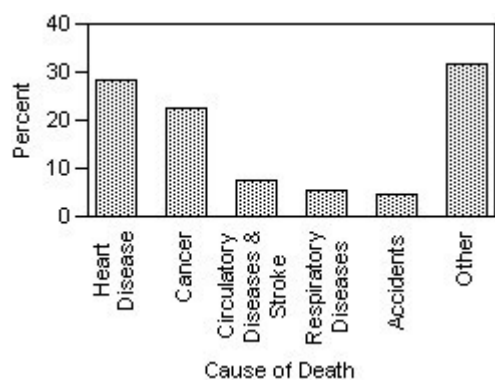


13) The Centers for Disease Control in the U.S.A. lists causes of death for individual states in 2002. The mortality data for the five leading causes of death for one state is given.

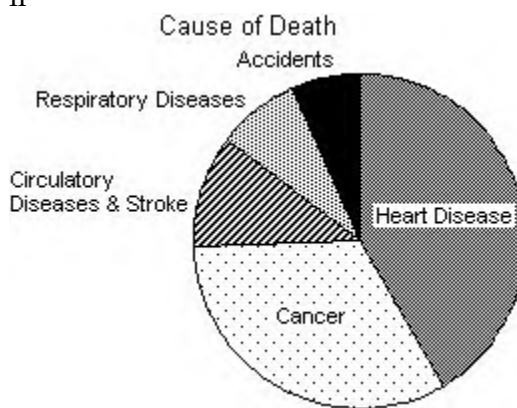
Cause of Death	Percent
Heart Disease	28.5%
Cancer	23.2%
Circulatory diseases and stroke	7.5%
Respiratory diseases	5.5%
Accidents	4.8%

Which of the following displays is/are appropriate to describe the data for all causes of death? (More than one display may be appropriate.)

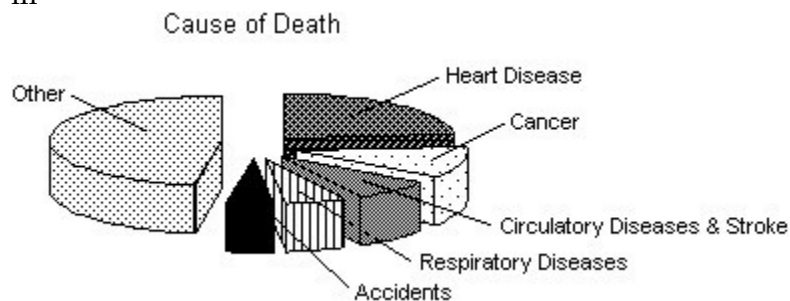
I



II



III



- A) I, II
- B) I, II, III
- C) I
- D) II
- E) None of these displays are appropriate.

Answer: C

Diff: 2 Type: BI

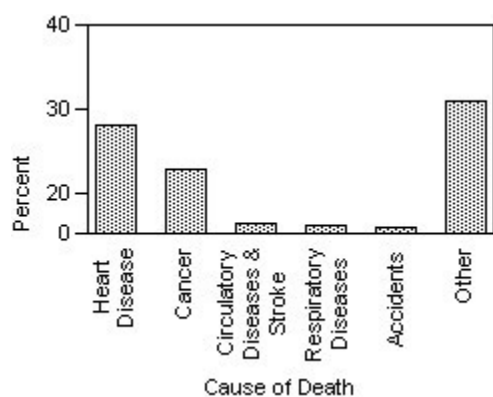
Objective: (2.1) Determine Appropriate Display for Data

14) The Centers for Disease Control in the U.S.A. lists causes of death for individual states in 2002. The mortality data for the five leading causes of death for one state is given.

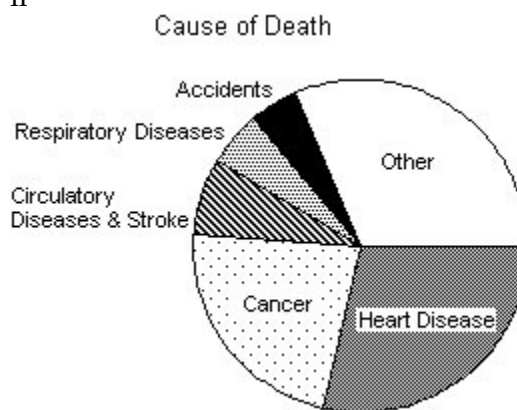
Cause of Death	Percent
Heart Disease	28.5%
Cancer	23.2%
Circulatory diseases and stroke	7.5%
Respiratory diseases	5.5%
Accidents	4.8%

Which of the following displays is/are appropriate to describe the data for all causes of death? (More than one display may be appropriate.)

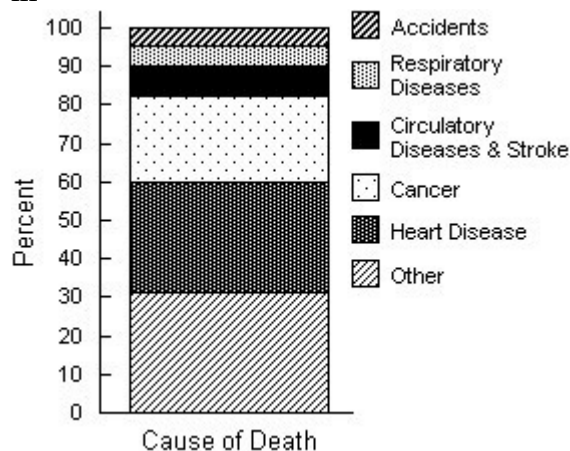
I



II



III



A) I, II

B) I, II, III

C) II, III

D) II

E) None of these displays are appropriate.

Answer: C

Diff: 2 Type: BI

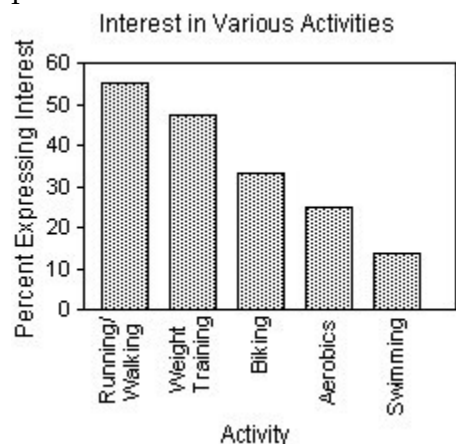
Objective: (2.1) Determine Appropriate Display for Data

15) The City of Windsor Department of Parks and Recreation is planning to build a recreation centre in one of the city's parks. They conducted a poll to find out which of five types of physical activities the local population would be interested in. The poll was based on telephone responses from 1013 randomly selected adults. The table shows the percentages of people who expressed interest in various activities.

Activity	Percent
Running/Walking	56%
Weight Training	48%
Biking	33%
Aerobics	25%
Swimming	13%

Which of the following displays is/are appropriate to describe the data for these five activities? (More than one display may be appropriate.)

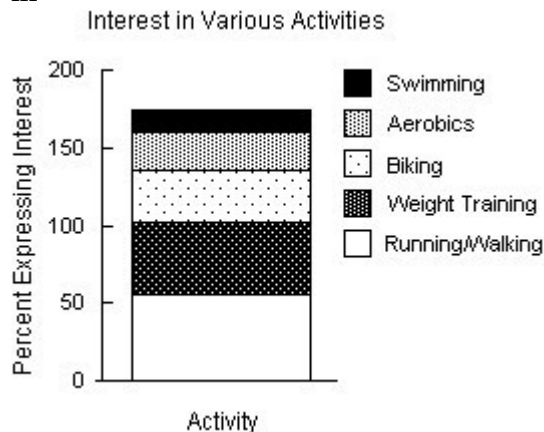
I



II



III



- A) I  
 B) I, II  
 C) I, II, III  
 D) II  
 E) None of these displays are appropriate.

Answer: A

Diff: 2 Type: BI

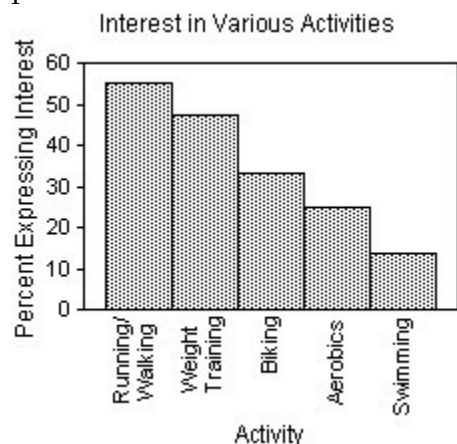
Objective: (2.1) Determine Appropriate Display for Data

16) The City of Windsor Department of Parks and Recreation is planning to build a recreation centre in one of the city's parks. They conducted a poll to find out which of five types of physical activities the local population would be interested in. The poll was based on telephone responses from 1013 randomly selected adults. The table shows the percentages of people who expressed interest in various activities.

Activity	Percent
Running/Walking	56%
Weight Training	48%
Biking	33%
Aerobics	25%
Swimming	13%

Which of the following displays is/are appropriate to describe the data for these five activities? (More than one display may be appropriate.)

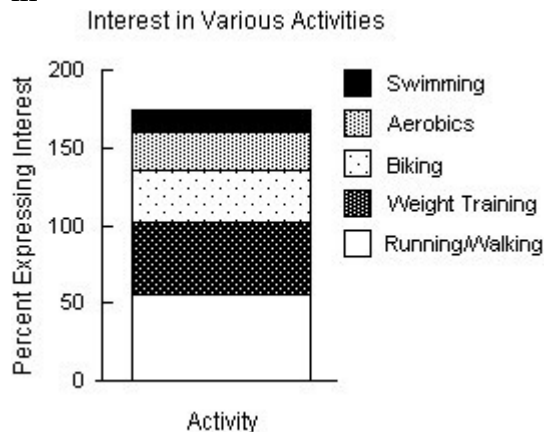
I



II



III



- A) II  
 B) I, II, III  
 C) I, II  
 D) I  
 E) None of these displays are appropriate.

Answer: E

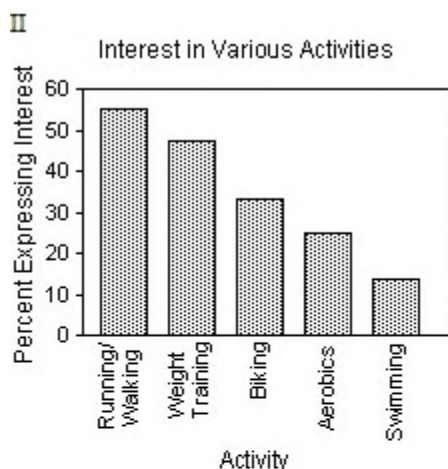
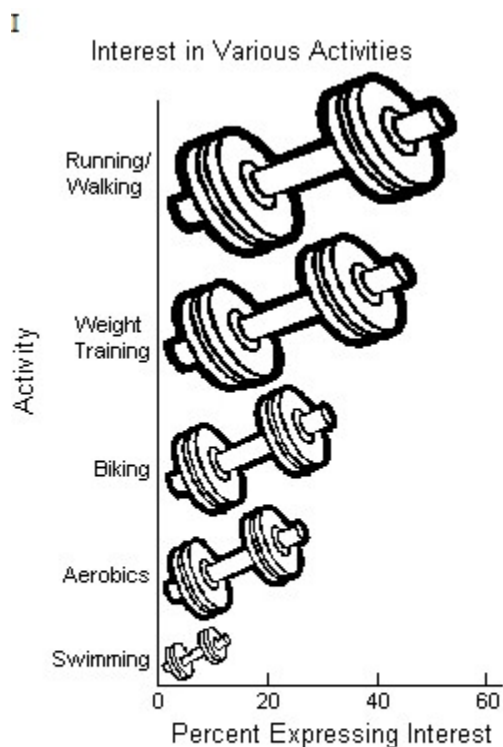
Diff: 2 Type: BI

Objective: (2.1) Determine Appropriate Display for Data

17) The City of Windsor Department of Parks and Recreation is planning to build a recreation centre in one of the city's parks. They conducted a poll to find out which of five types of physical activities the local population would be interested in. The poll was based on telephone responses from 1013 randomly selected adults. The table shows the percentages of people who expressed interest in various activities.

Activity	Percent
Running/Walking	56%
Weight Training	48%
Biking	33%
Aerobics	25%
Swimming	13%

Which of the following displays is/are appropriate to describe the data for these five activities? (More than one display may be appropriate.)



- A) I, II, III
- B) II, III
- C) II
- D) III
- E) None of these displays are appropriate.

Answer: C

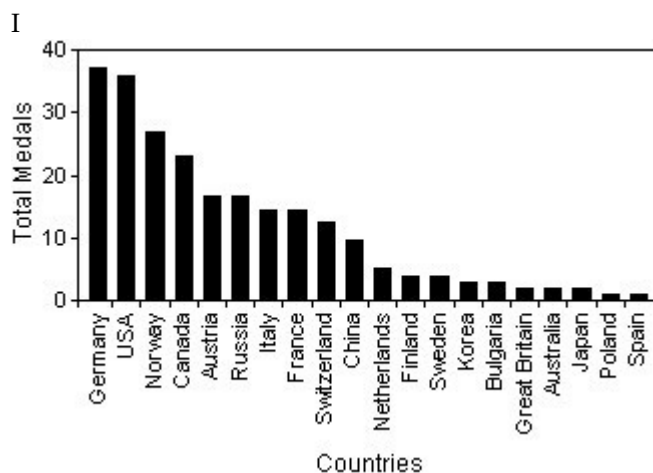
Diff: 2 Type: BI

Objective: (2.1) Determine Appropriate Display for Data

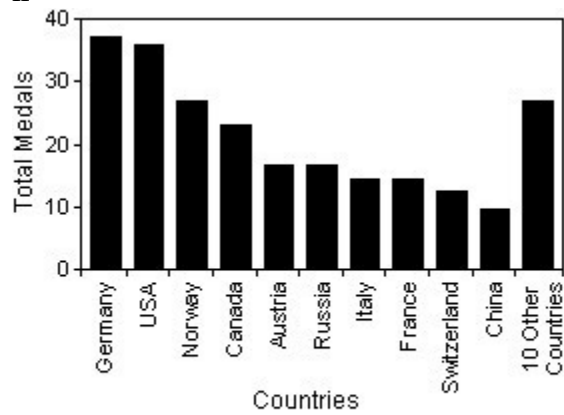
18) A prediction of the number of medals to be won by various countries in the 2014 Winter Olympics was made using past Olympics data. The predicted values are listed in the table below.

Country	Medals	Country	Medals
Germany	37	Netherlands	5
USA	36	Finland	4
Norway	27	Sweden	4
Canada	24	Korea	3
Austria	16	Bulgaria	3
Russia	16	Great Britain	2
Italy	15	Australia	2
France	15	Japan	2
Switzerland	13	Poland	1
China	10	Spain	1


Which of the following displays is the most appropriate for these data?



II



III



- A) I
- B) III
- C) II
- D) All of these displays are equally appropriate.
- E) None of these displays are appropriate.

Answer: C

Diff: 2 Type: BI

Objective: (2.1) Determine Appropriate Display for Data

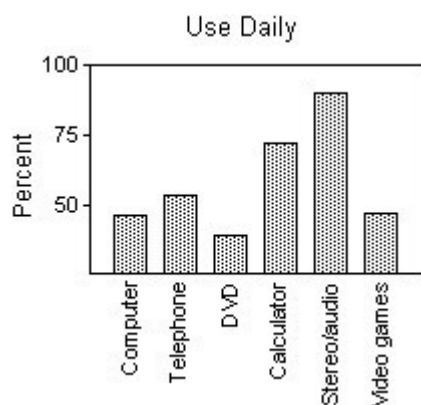


19) The focus of a recent survey was on teenagers' familiarity with and use of modern technology. The teenagers were asked if they used each of the following technologies on a daily basis and if the technology was critically important to own. For each question, the percentage of those responding "Yes" is given. Subtracting the "Use daily" percentage from the "Critically important to own" percentage gives the "Importance Gap". Here are the results:

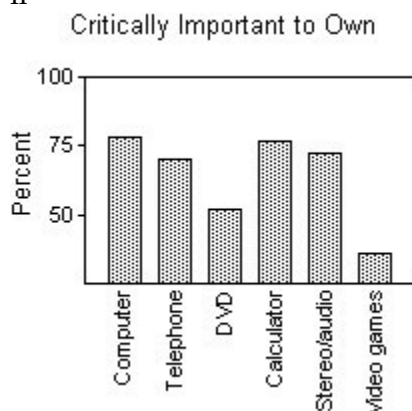
	Use daily	Critically important to own	Importance gap
Computer	46%	78%	32
Telephone	52%	69%	17
DVD	39%	52%	13
Calculator	71%	77%	6
Stereo/audio	90%	72%	-18
Video games	48%	21%	-27

Which of the following displays is the most appropriate for these data?

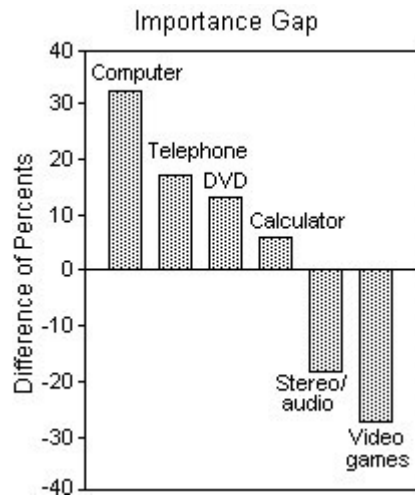
I



II



III



- A) III
- B) I
- C) II
- D) All of these displays are equally appropriate.
- E) None of these displays are appropriate.

Answer: A

Diff: 2 Type: BI

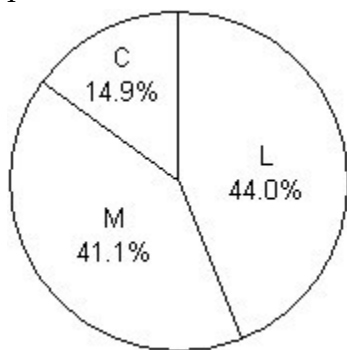
Objective: (2.1) Determine Appropriate Display for Data

20) Students in a Political Science course were asked to describe their politics as "Liberal", "Moderate", or "Conservative." Here are the results:

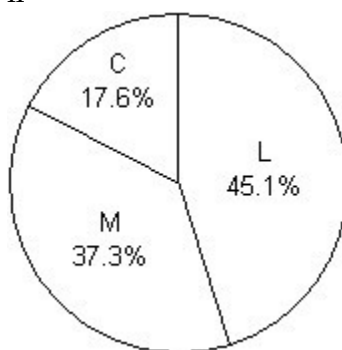
		Politics		
		Liberal	Moderate	Conservative
Sex	Female	45	49	12
	Male	64	53	25
	Total	109	102	37
		Total		
		248		

Which graphical display shows the marginal distribution of politics in the class?

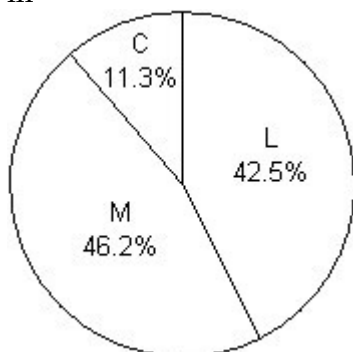
I



II



III



A) III

B) II

C) I

D) I, II, III

E) None of these displays show the marginal distribution of politics in the class.

Answer: C

Diff: 2 Type: BI

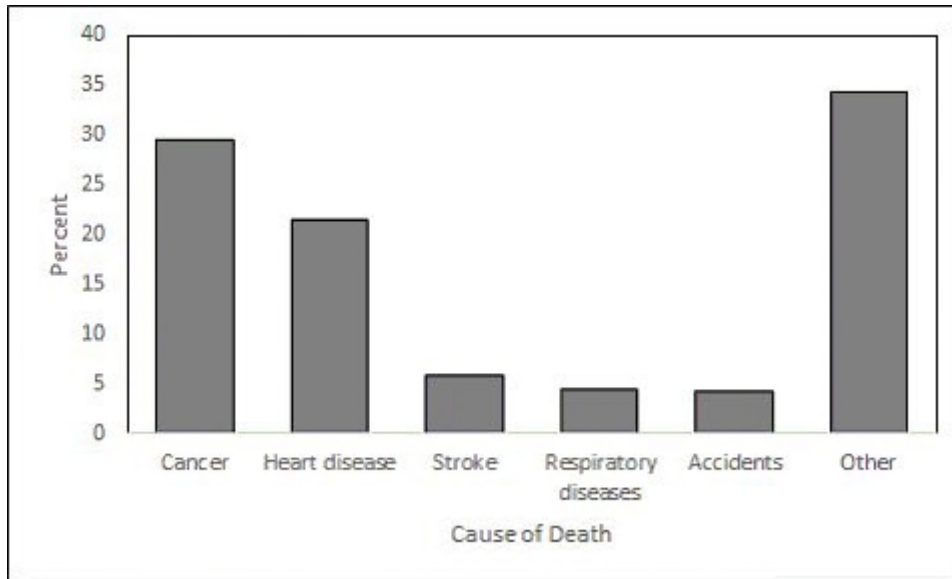
Objective: (2.1) Determine Appropriate Display for Data

21) Statistics Canada gives the following mortality data for Canada in 2007.

Cause of Death	Percent
Cancer	29.6
Heart disease	21.5
Stroke	5.9
Respiratory diseases	4.5
Accidents	4.2

Create a bar chart to display the mortality percentages for all causes in Canada in 2007.

Answer:



Diff: 1 Type: SA

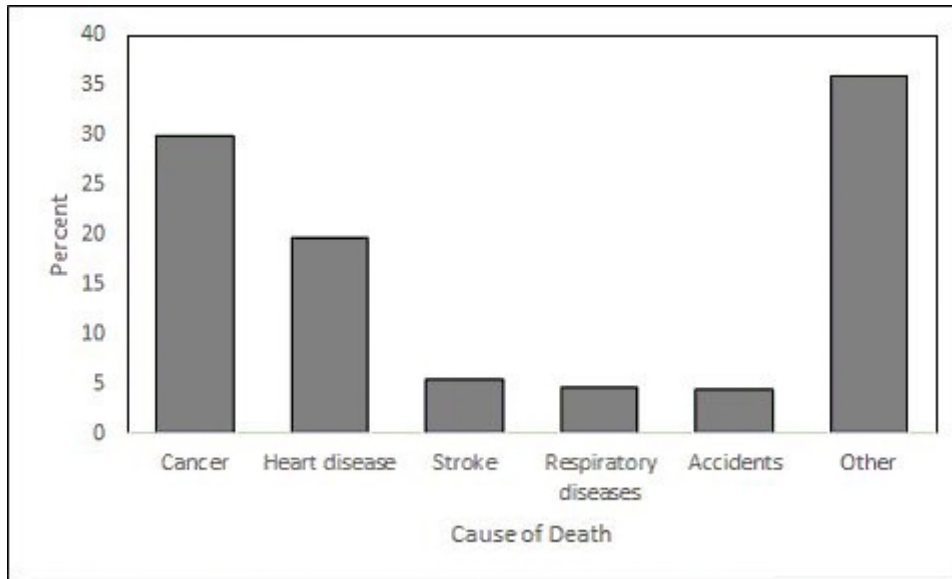
Objective: (2.1) Create Graphical Display for Data I

22) Statistics Canada gives the following mortality data for Canada in 2011.

Cause of Death	Percent
Cancer	29.9
Heart disease	19.7
Stroke	5.5
Respiratory diseases	4.6
Accidents	4.4

Create a bar chart to display the mortality percentages for all causes in Canada in 2011.

Answer:



Diff: 1 Type: SA

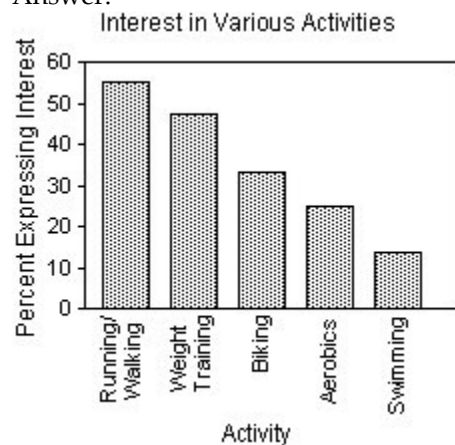
Objective: (2.1) Create Graphical Display for Data I

23) The City of Windsor Department of Parks and Recreation is planning to build a recreation centre in one of the city's parks. They conducted a poll to find out the types of physical activities the local population would be interested in. The poll was based on telephone responses from 1013 randomly selected adults. The table shows the percentages of people who expressed interest in various activities.

Activity	Percent
Running/Walking	56
Weight Training	48
Biking	33
Aerobics	25
Swimming	13

Create a bar chart for these data.

Answer:



Diff: 1 Type: SA

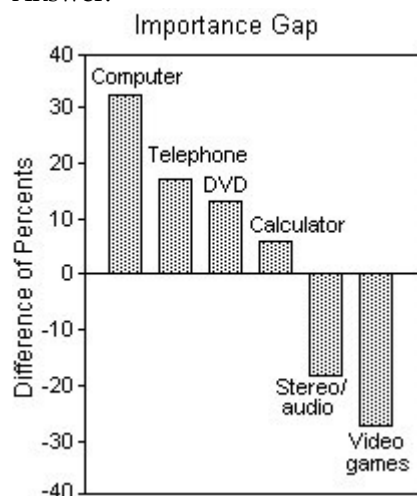
Objective: (2.1) Create Graphical Display for Data I

24) The focus of a recent survey was on teenagers' familiarity with and use of modern technology. The teenagers were asked if they used each of the following technologies on a daily basis and if the technology was critically important to own. For each question, the percentage of those responding "Yes" is given. Subtracting the "Use daily" percentage from the "Critically important to own" percentage gives the "Importance Gap." Here are the results:

	Use daily	Critically important to own	Importance gap
Computer	47%	79%	32
Telephone	54%	71%	17
DVD	38%	51%	13
Calculator	72%	78%	6
Stereo/audio	90%	72%	-18
Video games	48%	21%	-27

Create a bar chart for the "Importance Gap".

Answer:



Diff: 1 Type: SA

Objective: (2.1) Create Graphical Display for Data I

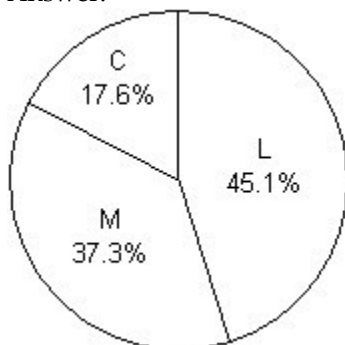


25) Students in a Political Science course were asked to describe their politics as "Liberal", "Moderate", or "Conservative." Here are the results:

		Politics			
Sex		Liberal	Moderate	Conservative	Total
	Female	45	49	12	106
	Male	64	53	25	142
	Total	109	102	37	248

Produce a pie chart that shows the conditional distribution of politics among the males.

Answer:



Diff: 1 Type: SA

Objective: (2.1) Create Graphical Display for Data I

## 2.2 Exploring the Relationship Between Two Categorical Variables

1) A survey of automobiles parked in student and staff lots at a large university classified the brands by region of origin, as seen in the table.

		Driver	
Origin		Student	Staff
	North American	91	90
	European	31	16
	Asian	68	54

What is the marginal distribution of origin?

- A) 52% North American, 13% European, 35% Asian
- B) 56% North American, 10% European, 34% Asian
- C) 54% Students, 46% Staff
- D) 107% North American, 16% European, 54% Asian
- E) 48% North American, 16% European, 36% Asian

Answer: A

Diff: 2 Type: BI

Objective: (2.2) Find Marginal or Conditional Distribution

2) A survey of automobiles parked in student and staff lots at a large university classified the brands by country of origin, as seen in the table.

		Driver	
		Student	Staff
Origin	North American	100	90
	European	32	24
	Asian	58	57

What is the conditional distribution of origin for students?

- A) 53% North American, 16% European, 32% Asian
- B) 25% North American, 7% European, 16% Asian
- C) 53% North American, 14% European, 33% Asian
- D) 53% North American, 17% European, 31% Asian
- E) 28% North American, 9% European, 16% Asian

Answer: D

Diff: 2 Type: BI

Objective: (2.2) Find Marginal or Conditional Distribution

3) A survey of automobiles parked in student and staff lots at a large university classified the brands by country of origin, as seen in the table.

		Driver	
		Student	Staff
Origin	North American	103	92
	European	39	21
	Asian	68	45

What is the conditional distribution of origin for staff?

- A) 25% North American, 6% European, 12% Asian
- B) 49% North American, 19% European, 32% Asian
- C) 28% North American, 11% European, 18% Asian
- D) 53% North American, 16% European, 31% Asian
- E) 58% North American, 13% European, 28% Asian

Answer: E

Diff: 2 Type: BI

Objective: (2.2) Find Marginal or Conditional Distribution

4) A company held a blood pressure screening clinic for its employees. The results are summarized in the table below by age group and blood pressure level.

		Age		
		Under 30	30-49	Over 49
Blood Pressure	Low	29	38	32
	Normal	46	86	89
	High	16	60	68

Find the marginal distribution of blood pressure level.

- A) 20% low, 40% normal, 41% high
- B) 20% under 30, 40% between 30-49, 41% over 50
- C) 21% low, 48% normal, 31% high
- D) 32% low, 51% normal, 18% high
- E) 27% low, 91% normal, 45% high

Answer: C

Diff: 2 Type: BI

Objective: (2.2) Find Marginal or Conditional Distribution

5) A company held a blood pressure screening clinic for its employees. The results are summarized in the table below by age group and blood pressure level.

		Age		
		Under 30	30-49	Over 49
Blood Pressure	Low	28	44	34
	Normal	50	98	88
	High	25	52	66

Find the conditional distribution of blood pressure level for employees under 30.

- A) 18% low, 47% normal, 35% high
- B) 23% low, 51% normal, 27% high
- C) 22% low, 49% normal, 29% high
- D) 27% low, 49% normal, 24% high
- E) 6% low, 10% normal, 5% high

Answer: D

Diff: 2 Type: BI

Objective: (2.2) Find Marginal or Conditional Distribution

6) A company held a blood pressure screening clinic for its employees. The results are summarized in the table below by age group and blood pressure level.

	Age		
	Under 30	30-49	Over 49
Blood Pressure			
Low	22	37	30
Normal	42	91	94
High	18	50	68

Find the conditional distribution of blood pressure level for employees in the 30-49 age group.

- A) 27% low, 51% normal, 22% high
- B) 8% low, 20% normal, 11% high
- C) 20% low, 50% normal, 30% high
- D) 21% low, 51% normal, 28% high
- E) 16% low, 49% normal, 35% high

Answer: D

Diff: 2 Type: BI

Objective: (2.2) Find Marginal or Conditional Distribution

7) A company held a blood pressure screening clinic for its employees. The results are summarized in the table below by age group and blood pressure level.

	Age		
	Under 30	30-49	Over 49
Blood Pressure			
Low	26	40	38
Normal	45	94	89
High	23	53	73

Find the conditional distribution of blood pressure level for employees over 49.

- A) 8% low, 19% normal, 15% high
- B) 21% low, 50% normal, 28% high
- C) 28% low, 48% normal, 24% high
- D) 19% low, 45% normal, 37% high
- E) 22% low, 47% normal, 31% high

Answer: D

Diff: 2 Type: BI

Objective: (2.2) Find Marginal or Conditional Distribution

8) A survey of university students in Canada reported the following percentages.

	Cat lover	Dog lover	Other	Total
Brand 1 Cola	22.5%	28.0%	16.5%	67.0%
Brand 2 Cola	7.5%	12.0%	13.5%	33.0%
Total	30.0%	40.0%	30.0%	100%

Find the marginal distribution of pet preference.

- A) 30.0% cat, 40.0% dog, 30.0% other
- B) 22.5% cat, 28.0% dog, 16.5% other
- C) 7.5% cat, 12.0% dog, 13.5% other
- D) 15.0% cat, 16.0% dog, 3.0% other
- E) 19.0% cat, 24.0% dog, 57.0% other

Answer: A

Diff: 2 Type: BI

Objective: (2.2) Find Marginal or Conditional Distribution

9) A survey of university students in Canada reported the following percentages.

	Cat lover	Dog lover	Other	Total
Brand 1 Cola	22.5%	28.0%	16.5%	67.0%
Brand 2 Cola	7.5%	12.0%	13.5%	33.0%
Total	30.0%	40.0%	30.0%	100%

Find the conditional distribution of pet preference for students that prefer Brand 1 Cola.

- A) 30.0% cat, 40.0% dog, 30.0% other
- B) 22.5% cat, 28.0% dog, 16.5% other
- C) 33.6% cat, 41.8% dog, 24.6% other
- D) 22.7% cat, 36.4% dog, 40.9% other
- E) 19.0% cat, 24.0% dog, 57.0% other

Answer: C

Diff: 2 Type: BI

Objective: (2.2) Find Marginal or Conditional Distribution

10) Students in a political science course were asked to describe their politics as "Liberal", "Moderate", or "Conservative." Here are the results:

Sex	Politics			
	Liberal	Moderate	Conservative	Total
Female	30	42	11	83
Male	41	47	23	111
Total	71	89	34	194

What percent of the class considers themselves to be "Liberal"?

- A) 36.1%
- B) 57.7%
- C) 21.1%
- D) 36.6%
- E) 15.5%

Answer: D

Diff: 2 Type: BI

Objective: (2.2) Interpret Contingency Table I

11) Students in a political science course were asked to describe their politics as "Liberal", "Moderate", or "Conservative." Here are the results:

Sex	Politics			
	Liberal	Moderate	Conservative	Total
Female	26	34	15	75
Male	44	47	24	115
Total	70	81	39	190

What percent of the females in the class consider themselves to be "Liberal"?

- A) 38.3%
- B) 45.3%
- C) 34.7%
- D) 37.1%
- E) 36.8%

Answer: C

Diff: 3 Type: BI

Objective: (2.2) Interpret Contingency Table I

12) Students in a political science course were asked to describe their politics as "Liberal", "Moderate", or "Conservative." Here are the results:

		Politics			
Sex		Liberal	Moderate	Conservative	Total
	Female	37	25	8	70
	Male	41	55	28	124
	Total	78	80	36	194

What percent of all males in the class are "Liberals"?

- A) 21.1%
- B) 33.1%
- C) 40.2%
- D) 52.9%
- E) 52.6%

Answer: B

Diff: 3 Type: BI

Objective: (2.2) Interpret Contingency Table I

13) Students in a political science course were asked to describe their politics as "Liberal", "Moderate", or "Conservative." Here are the results:

		Politics			
Sex		Liberal	Moderate	Conservative	Total
	Female	41	31	7	79
	Male	43	37	20	100
	Total	84	68	27	179

What percent of all students in the class are males who consider themselves to be "Liberal"?

- A) 51.2%
- B) 43%
- C) 24%
- D) 46.9%
- E) 22.9%

Answer: C

Diff: 2 Type: BI

Objective: (2.2) Interpret Contingency Table I



14) Students in a political science course were asked to describe their politics as "Liberal", "Moderate", or "Conservative." Here are the results:

		Politics			
Sex		Liberal	Moderate	Conservative	Total
	Female	27	31	13	71
	Male	42	38	24	104
	Total	69	69	37	175

What percent of all "Moderates" in the class are male?

- A) 44.9%
- B) 55.1%
- C) 21.7%
- D) 36.5%
- E) 39.4%

Answer: B

Diff: 3 Type: BI

Objective: (2.2) Interpret Contingency Table I

15) A college examined the impact of an applicant's ethnicity on the likelihood of admission to a particular program. The data are summarized in the table below.

		Admission Decision			
Ethnicity		Accepted	Wait-listed	Turned away	Total
	Black/Hispanic	466	0	26	492
	Asian	119	50	132	301
	White	328	267	369	964
	Total	913	317	527	1757

What percent of all applicants were Black or Hispanic?

- A) 28%
- B) 26.5%
- C) 53.9%
- D) 48%
- E) 17.1%

Answer: A

Diff: 2 Type: BI

Objective: (2.2) Interpret Contingency Table I

16) A college examined the impact of an applicant's ethnicity on the likelihood of admission to a particular program. The data are summarized in the table below.

Ethnicity	Admission Decision			
	Accepted	Wait-listed	Turned away	Total
Black/Hispanic	489	0	34	523
Asian	92	46	133	271
White	316	260	363	939
Total	897	306	530	1733

What percent of all applicants were turned away?

- A) 51.8%
- B) 17.7%
- C) 30.2%
- D) 30.6%
- E) 44.1%

Answer: D

Diff: 2 Type: BI

Objective: (2.2) Interpret Contingency Table I

17) A college examined the impact of an applicant's ethnicity on the likelihood of admission to a particular program. The data are summarized in the table below.

Ethnicity	Admission Decision			
	Accepted	Wait-listed	Turned away	Total
Black/Hispanic	482	0	20	502
Asian	107	53	135	295
White	330	249	352	931
Total	919	302	507	1728

What percent of White applicants were accepted?

- A) 26.7%
- B) 35.4%
- C) 37.8%
- D) 35.9%
- E) 19.1%

Answer: B

Diff: 3 Type: BI

Objective: (2.2) Interpret Contingency Table I

18) A college examined the impact of an applicant's ethnicity on the likelihood of admission to a particular program. The data are summarized in the table below.

Ethnicity	Admission Decision			
	Accepted	Wait-listed	Turned away	Total
Black/Hispanic	457	0	23	480
Asian	109	56	137	302
White	317	264	348	929
Total	883	320	508	1711

What percent of Asian applicants were wait-listed?

- A) 17.5%
- B) 3.3%
- C) 18.5%
- D) 36.1%
- E) 45.4%

Answer: C

Diff: 3 Type: BI

Objective: (2.2) Interpret Contingency Table I

19) A college examined the impact of an applicant's ethnicity on the likelihood of admission to a particular program. The data are summarized in the table below.

Ethnicity	Admission Decision			
	Accepted	Wait-listed	Turned away	Total
Black/Hispanic	456	0	38	494
Asian	91	60	137	288
White	329	245	372	946
Total	876	305	547	1728

What percent of accepted applicants were Black or Hispanic?

- A) 108.6%
- B) 6.9%
- C) 92.3%
- D) 52.1%
- E) 26.4%

Answer: D

Diff: 3 Type: BI

Objective: (2.2) Interpret Contingency Table I

20) Just how accurate are the weather forecasts we hear every day? The table below compares the daily forecast with a city's actual weather for a year.

		Actual Weather	
		Rain	No rain
Forecast	Rain	32	55
	No rain	10	268

On what percent of days did it actually rain?

- A) 2.7%
- B) 11.5%
- C) 76.2%
- D) 8.8%
- E) 23.8%

Answer: B

Diff: 3 Type: BI

Objective: (2.2) Interpret Contingency Table II

21) Just how accurate are the weather forecasts we hear every day? The table below compares the daily forecast with a city's actual weather for a year.

		Actual Weather	
		Rain	No rain
Forecast	Rain	34	54
	No rain	8	269

On what percent of days was rain predicted?

- A) 14.8%
- B) 24.1%
- C) 38.6%
- D) 9.3%
- E) 11.5%

Answer: B

Diff: 3 Type: BI

Objective: (2.2) Interpret Contingency Table II

22) Just how accurate are the weather forecasts we hear every day? The table below compares the daily forecast with a city's actual weather for a year.

	Actual Weather	
	Rain	No rain
Forecast	Rain	28      55
	No rain	11      271

What percent of the time was the forecast correct?

- A) 74.2%
- B) 7.7%
- C) 81.9%
- D) 77.3%
- E) 18.1%

Answer: C

Diff: 3    Type: BI

Objective: (2.2) Interpret Contingency Table II

23) A survey of automobiles parked in student and staff lots at a large university classified the brands by region of origin, as seen in the table.

	Driver	
	Student	Staff
Origin	North American	102      99
	European	30      17
	Asian	61      51

What percent of all the cars surveyed were foreign (not North American)?

- A) 44.2%
- B) 18.9%
- C) 13.1%
- D) 25.3%
- E) 31.1%

Answer: A

Diff: 3    Type: BI

Objective: (2.2) Interpret Contingency Table II

24) A survey of automobiles parked in student and staff lots at a large university classified the brands by region of origin, as seen in the table.

Origin	Driver	
	Student	Staff
North American	90	86
European	31	15
Asian	60	52

What percent of the North American cars were owned by staff?

- A) 48.9%
- B) 51.1%
- C) 56.2%
- D) 25.7%
- E) 128.4%

Answer: A

Diff: 3 Type: BI

Objective: (2.2) Interpret Contingency Table II

25) A survey of automobiles parked in student and staff lots at a large university classified the brands by region of origin, as seen in the table.

Origin	Driver	
	Student	Staff
North American	107	91
European	30	21
Asian	63	57

What percent of the staff owned North American cars?

- A) 24.7%
- B) 116.7%
- C) 53.8%
- D) 53.5%
- E) 46%

Answer: C

Diff: 3 Type: BI

Objective: (2.2) Interpret Contingency Table II

26) A survey of automobiles parked in student and staff lots at a large university classified the brands by region of origin, as seen in the table.

	Driver	
	Student	Staff
Origin	North American	106      94
	European	35      25
	Asian	65      50

What percent of the foreign cars were owned by students?

- A) 42.9%
- B) 57.1%
- C) 37.1%
- D) 20%
- E) 26.7%

Answer: B

Diff: 3 Type: BI

Objective: (2.2) Interpret Contingency Table II

27) Most patients who undergo surgery make routine recoveries and are discharged as planned, but some patients experience complications and their discharge is delayed. A small city has a large hospital and a small hospital, each performing major and minor surgeries. Data is collected at each hospital to see how many surgical patients have their discharges delayed by postsurgical complications. The results are shown in the following table.

	Discharge Delayed	
	Large hospital	Small hospital
Procedure	Major surgery	60 of 600      8 of 40
	Minor surgery	4 of 100      12 of 150

Overall, for what percent of surgical patients was discharge delayed?

- A) 1.8%
- B) 9.4%
- C) 42%
- D) 9.1%
- E) 7.6%

Answer: B

Diff: 3 Type: BI

Objective: (2.2) Interpret Contingency Table II



28) Most patients who undergo surgery make routine recoveries and are discharged as planned, but some patients experience complications and their discharge is delayed. A small city has a large hospital and a small hospital, each performing major and minor surgeries. Data is collected at each hospital to see how many surgical patients have their discharges delayed by postsurgical complications. The results are shown in the following table.

Procedure	Discharge Delayed	
	Large hospital	Small hospital
Major surgery	120 of 1000	20 of 80
Minor surgery	16 of 400	12 of 150

What were the discharge delay rates for each kind of surgery?

A) Major surgery: 13%

Minor surgery: 5.1%

B) Major surgery: 10.3%

Minor surgery: 10.3%

C) Major surgery: 9.7%

Minor surgery: 13.9%

D) Major surgery: 8.6%

Minor surgery: 1.7%

E) Major surgery: 37%

Minor surgery: 12%

Answer: A

Diff: 3 Type: BI

Objective: (2.2) Interpret Contingency Table II

29) Most patients who undergo surgery make routine recoveries and are discharged as planned, but some patients experience complications and their discharge is delayed. A small city has a large hospital and a small hospital, each performing major and minor surgeries. Data is collected at each hospital to see how many surgical patients have their discharges delayed by postsurgical complications. The results are shown in the following table.

Procedure	Discharge Delayed	
	Large hospital	Small hospital
Major surgery	72 of 600	12 of 60
Minor surgery	12 of 300	20 of 250

What were the discharge delay rates at each hospital?

A) Large hospital: 12.7%

Small hospital: 8.9%

B) Large hospital: 9.6%

Small hospital: 9.6%

C) Large hospital: 16%

Small hospital: 28%

D) Large hospital: 9.6%

Small hospital: 2.6%

E) Large hospital: 9.3%

Small hospital: 10.3%

Answer: E

Diff: 3 Type: BI

Objective: (2.2) Interpret Contingency Table II

30) A survey of university students in Canada reported the following percentages.

	Cat lover	Dog lover	Other	Total
Brand 1 Cola	22.5%	28.0%	16.5%	67.0%
Brand 2 Cola	7.5%	12.0%	13.5%	33.0%
Total	30.0%	40.0%	30.0%	

What percentage of cat and/or dog lovers prefers Brand 2 Cola?

A) 25.0%

B) 30.0%

C) 27.5%

D) 33.8%

E) 27.9%

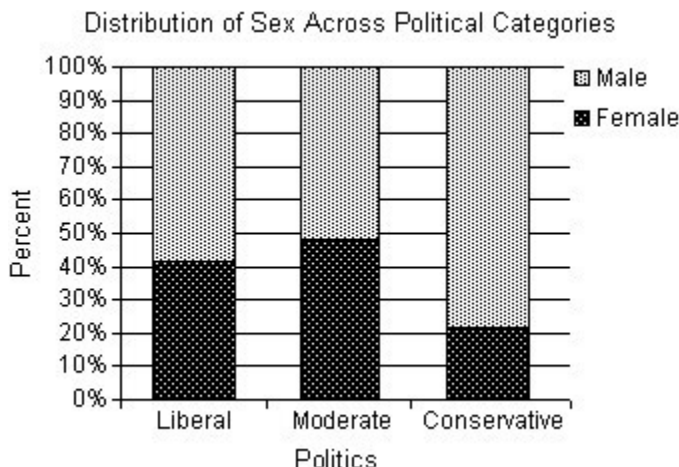
Answer: E

Diff: 3 Type: BI

Objective: (2.2) Interpret Contingency Table II

31) Students in a political science course were asked to describe their politics as "Liberal", "Moderate", or "Conservative." The results are listed in the table below, and a graphical display of the conditional distributions of sex among the three categories of politics is given.

		Politics		
Sex		Liberal	Moderate	Conservative
	Female	45	49	8
	Male	64	53	29
	Total	109	102	37



The political science instructor states that sex and politics are independent. Is this an accurate statement? Explain.

A) No. The percentage of males and females varies across political categories. The percentage of Liberals and Moderates who are female is approximately twice that of Conservatives who are female. This would suggest that sex and politics are not independent.

B) No. The percentage of males and females varies across political categories. The percentage of Liberals and Moderates who are male is approximately twice that of Conservatives who are male. This would suggest that sex and politics are not independent.

C) Yes. The percentage of males and females varies across political categories; however, there are more males in the class than females. There is not enough evidence to make an association between sex and politics. Sex and politics are independent.

D) No. The percentage of males and females is similar across political categories. This would suggest that sex and politics are not independent.

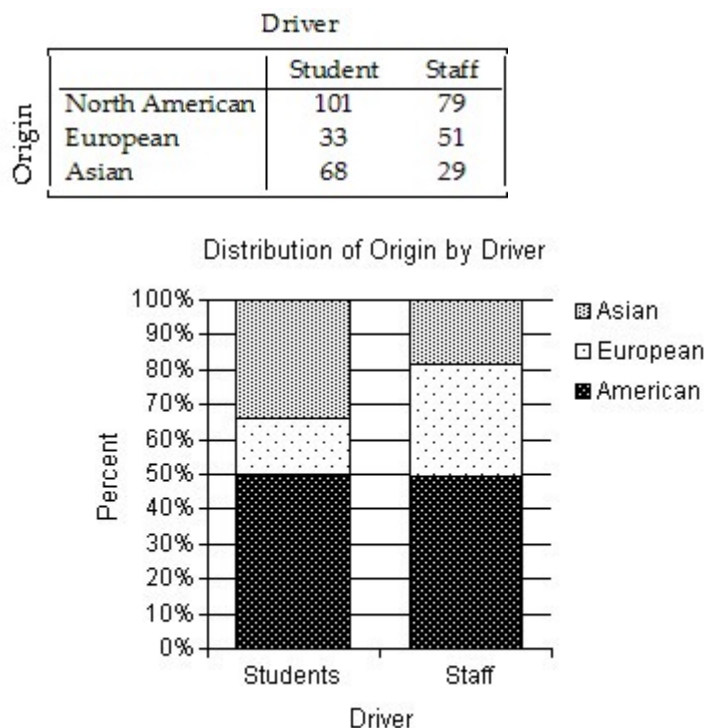
E) Yes. The percentage of males and females is similar across political categories. This would suggest that sex and politics are independent.

Answer: A

Diff: 2 Type: BI

Objective: (2.2) Interpret Conditional Distributions Display

32) A survey of automobiles parked in student and staff lots at a large university classified the brands by country of origin. The results are listed in the table below, and a graphical display of the conditional distributions of origin by driver is given.



Do you think that origin of the car is independent of the type of driver? Explain.

A) Yes. The conditional distributions of origin by driver have similarities and differences. The two groups own nearly the same percentage of American cars. Therefore, because of this one similarity, driver and origin must be independent.

B) No. The conditional distributions of origin by driver have similarities and differences. Although students appear to own a higher percentage of Asian cars and a smaller percentage of European cars than the staff, the two groups own nearly the same percentage of American cars. However, because of the differences, there is evidence of an association between driver and origin.

C) No. The conditional distributions of origin by driver have similarities and differences. Students own a higher percentage of Asian and European cars than the staff. Therefore, because of this difference, there must be an association between driver and origin.

D) No. The conditional distributions of origin by driver have similarities and differences. Although staff appear to own a higher percentage of Asian cars and a smaller percentage of European cars than the students, the two groups own nearly the same percentage of American cars. However, because of the differences, there is evidence of an association between driver and origin.

E) Yes. The conditional distributions of origin by driver have similarities and differences. Although students appear to own a higher percentage of Asian cars and a smaller percentage of European cars than the staff, the two groups own nearly the same percentage of American cars. However, because there are more students than staff, an association between driver and origin cannot be claimed.

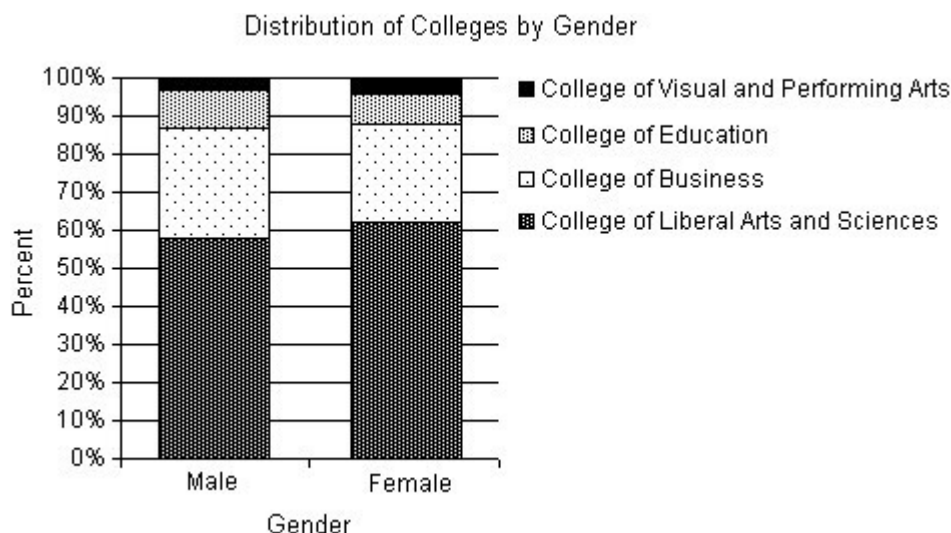
Answer: B

Diff: 2 Type: BI

Objective: (2.2) Interpret Conditional Distributions Display

33) At a university in the U.S.A., the incoming freshmen were surveyed about their chosen majors. The university organized the data by placing the majors into the appropriate colleges. The table displays the results for males and females by colleges. A graphical display of the conditional distributions of colleges by gender is given.

	Gender	
	Male	Female
College of Liberal Arts and Sciences	1809	1918
College of Business	905	804
College of Education	312	247
College of Visual and Performing Arts	94	124



Do you think that the college the freshmen will be entering is independent of the gender of the student? Explain.

- A) Yes. The conditional distributions of colleges by gender are similar. Since the distributions of colleges is essentially the same for males and females, there is evidence of an association between gender and colleges.
- B) Yes. The conditional distributions of colleges by gender are similar. Since the distributions of colleges is essentially the same for males and females, there is no evidence of an association between gender and colleges.
- C) No. The conditional distributions of colleges by gender vary. More male students will be entering the College of Business and the College of Education than female students. This is sufficient evidence of an association between gender and colleges.
- D) No. The conditional distributions of colleges by gender are similar. Since the distributions of colleges is essentially the same for males and females, there is no evidence of an association between gender and colleges.
- E) No. The conditional distributions of colleges by gender are similar. Since the distributions of colleges is essentially the same for males and females, there is evidence of an association between gender and colleges.

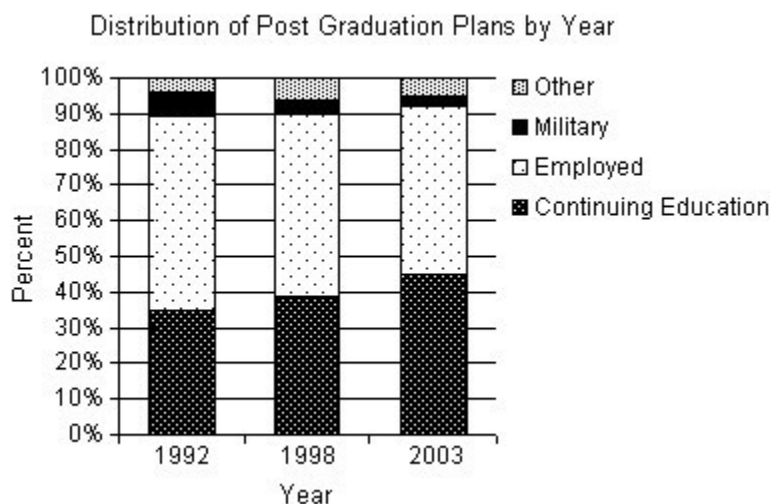
Answer: B

Diff: 2 Type: BI

Objective: (2.2) Interpret Conditional Distributions Display

34) The table below compares what students at a small Canadian university did after graduating with a bachelor's degree in 1992, 1998, and 2003. A graphical display of the conditional distributions of what students did after graduation by year is given.

	Year		
	1992	1998	2003
Continuing education	436	582	772
Employed	679	758	801
In the military	78	60	51
Other	52	92	87



Does this study present any evidence that postgraduation plans have changed over this 11-year period? Explain.

A) Yes. There is evidence that the percentage of graduates entering the work force after graduation has increased from 1992 to 2003. Likewise, the percentage of graduates continuing their education appears to have decreased from 1992 to 2003.

B) Yes. There is evidence that the percentage of graduates continuing their education has increased from 1992 to 2003. Likewise, the percentage of graduates entering the work force after graduation appears to have decreased from 1992 to 2003.

C) No. The percentage of graduates continuing their education has increased from 1992 to 2003. Likewise, the percentage of graduates entering the work force after graduation appears to have decreased from 1992 to 2003. However, this is not sufficient evidence to show any change due to the fact that those entering the military or seeking other options remained relatively constant.

D) No. The percentage of graduates continuing their education has increased from 1992 to 2003. Likewise, the percentage of graduates entering the work force after graduation appears to have decreased from 1992 to 2003. However, this is not sufficient evidence to show any change due to the fact that the number of students graduating has increased over this same time period.

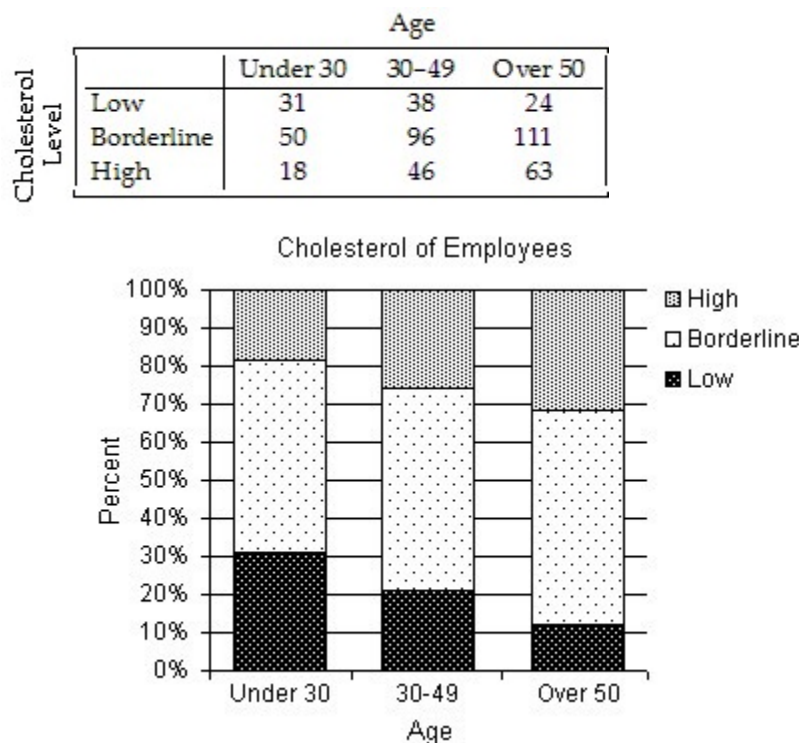
E) Yes. There is evidence that the percentage of graduates continuing their education and entering the work force after graduation has increased from 1992 to 2003.

Answer: B

Diff: 2 Type: BI

Objective: (2.2) Interpret Conditional Distributions Display

35) A company held a cholesterol screening clinic for its employees. The results are summarized in the table below by age group and cholesterol level. A graphical display of the conditional distributions of cholesterol levels by age is given.



Does this prove that aging causes increased cholesterol levels? Explain.

A) No. There is sufficient evidence of an association between age and cholesterol level. However, the percentage of employees with low cholesterol increased with age. Likewise, the percentage of employees with high cholesterol decreased with age.

B) No. Generally, an association between two variables does not imply a cause-and-effect relationship. Specifically, these data come from only one company and cannot be applied to all people. Only a controlled experiment can isolate the relationship between age and cholesterol level.

C) No. Generally, an association between two variables does imply a cause-and-effect relationship. Specifically, these data come from only one company and cannot be applied to all people. However, if more companies provided cholesterol screenings and these data were compiled, then the claim could be proven.

D) Yes. Generally, an association between two variables does imply a cause-and-effect relationship. However, these data come from only one company and cannot necessarily be applied to all people. A controlled experiment that can isolate the relationship between age and cholesterol level would make this a stronger claim.

E) Yes. There is evidence of an association between age and cholesterol level. The percentage of employees with high cholesterol increased with age. Likewise, the percentage of employees with low cholesterol decreased with age.

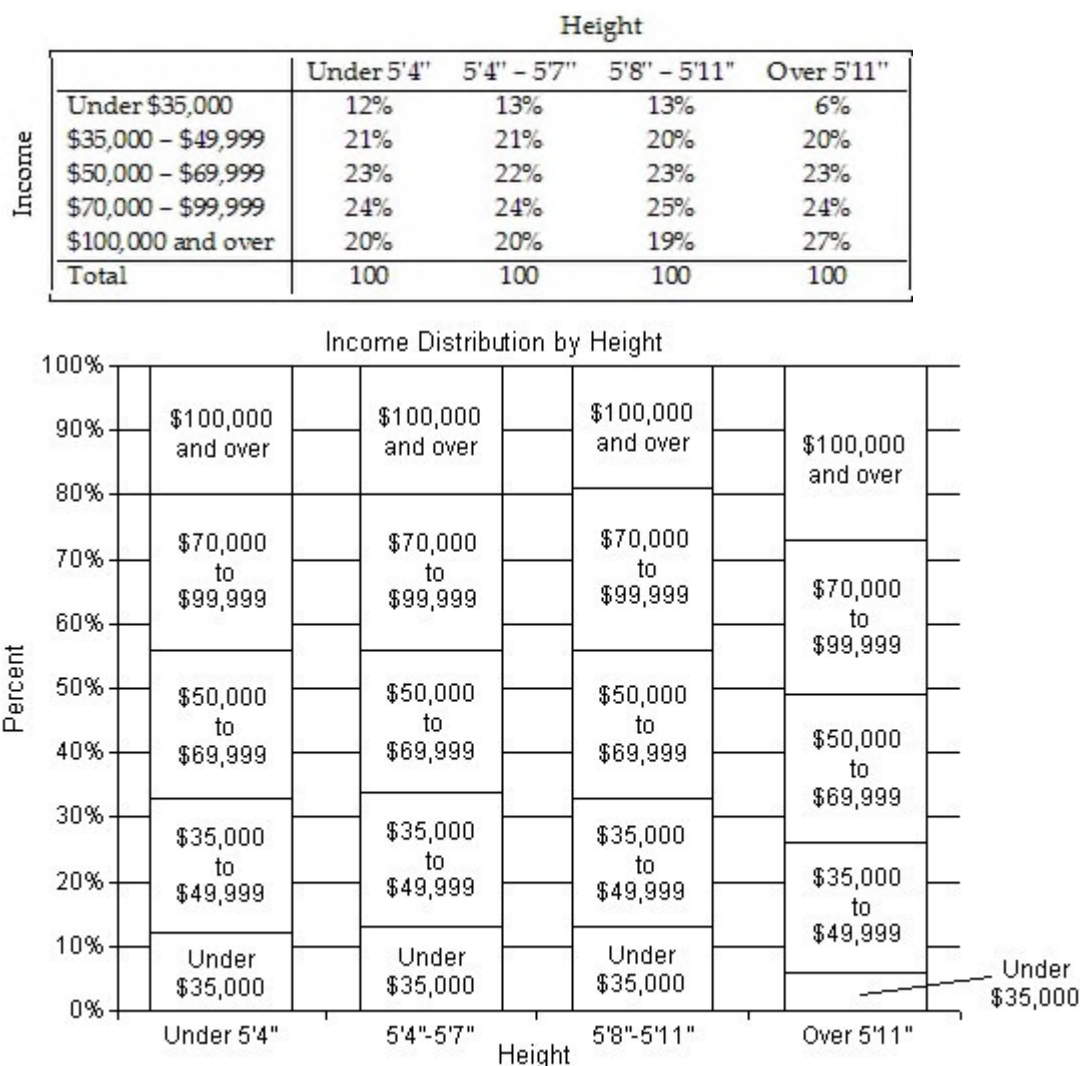
Answer: B

Diff: 2 Type: BI

Objective: (2.2) Interpret Conditional Distributions Display



36) A survey of salesmen was conducted to examine the possibility of a relationship between men's height and annual income. The company interested in the results of the survey believes that taller men are more successful at getting sales, resulting in a higher annual income. The table shows the percentages of income levels for each height category. A graphical display of the conditional distributions of income levels by height is given.



Do these data support the company's belief: taller men are more successful salesmen? Explain.

- A) Yes. The percentages in all income levels for salesmen over 5'11" are higher than the percentages in the same income levels for men 5'11" or shorter.
- B) Yes, to a certain extent. The percent of salesmen over 5'11" that make \$100,000 or more is 27%, compared to the 19% or 20% for men 5'11" or shorter. Similarly, the percent of salesmen over 5'11" that make under \$35,000 is 6%, compared to the 12% or 13% for men 5'11" or shorter. However, with these two exceptions, the percentages in the remaining income levels did not vary by more than 1%.
- C) No. The percentages in the income levels for the different height categories did not vary by more than 1%, with the exception of salesmen over 5'11" in the under \$35,000 category and the \$100,000 or over category. These data should be ignored.
- D) No. The percentages in all income levels for all height categories of salesmen are too similar to make this claim.



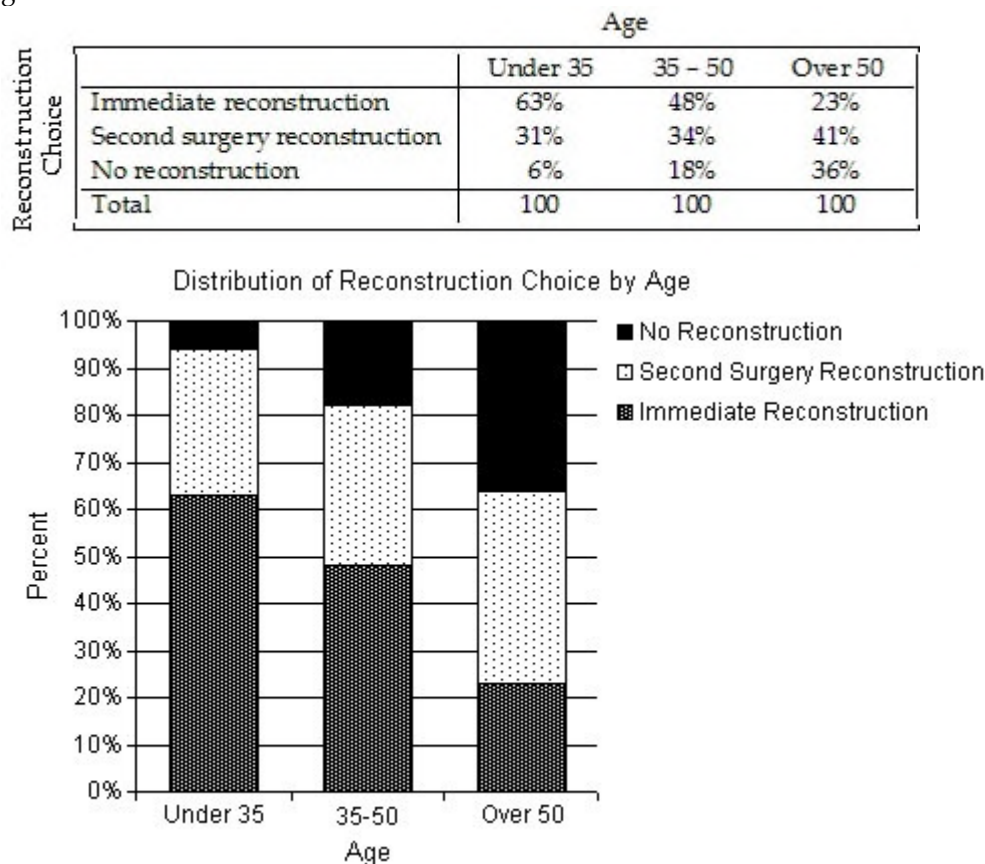
E) Yes. The percent of salesmen over 5'11" that make \$100,000 or more is 27%, compared to the 19% or 20% for men 5'11" or shorter. Similarly, the percent of salesmen over 5'11" that make under \$35,000 is 6%, compared to the 12% or 13% for men 5'11" or shorter.

Answer: B

Diff: 2 Type: BI

Objective: (2.2) Interpret Conditional Distributions Display

37) Most women who have had a mastectomy can have breast reconstruction surgery. The reconstruction surgery can be performed at the same time as the mastectomy, an immediate reconstruction, or after the patient has healed from the mastectomy, second surgery reconstruction. Some women opt not to have reconstruction surgery. The table shows the percentages of women's choices regarding reconstruction for three age categories. A graphical display of the conditional distributions of reconstruction choice by age is given.



Does there appear to be an association between reconstruction choice and age? Explain.

- A) No. The number of women over 50 who were included in these data was probably higher than the number who were under 35. Using this assumption, there is not enough evidence to show an association between reconstruction choice and age.
- B) Yes. A higher percentage of older women, especially over 50, who have had mastectomies choose not to have reconstruction surgery. Likewise, a higher percentage of younger patients choose to have immediate reconstruction. It appears that as the age of women having mastectomies increases, the importance of having reconstructive breast surgery decreases.
- C) No. The percentages of women who have had mastectomies who choose to have second surgery reconstruction do not vary significantly. There is not enough evidence to show an association between reconstruction choice and age.
- D) No. In all age groups, most women want reconstruction surgery.
- E) Yes. A higher percentage of older women, especially over 50, who have had mastectomies choose to have second surgery reconstruction. It appears that as the age of women having mastectomies increases, the importance of having reconstructive breast surgery increases.

Answer: B

Diff: 2 Type: BI

Objective: (2.2) Interpret Conditional Distributions Display

38) A company must decide which of two delivery services they will contract with. During a recent trial period they shipped numerous packages with each service, and have kept track of how often deliveries did not arrive on time. Here are the data:

Delivery service	Type of service	Number of deliveries	Number of late packages
Super Ship	Regular	100	3
	Overnight	400	40
Fast Paks	Regular	400	16
	Overnight	100	14

Based on the results, the company decided to hire Fast Paks. Do you agree they deliver on time more often? Explain.

A) Yes. Fast Paks only delivers 3% of its regular packages late, compared to Super Ship, who deliver 4% of its regular packages late. Additionally, Fast Paks only delivers 10% of its overnight packages late, compared to Super Ship, who delivers 14% of its overnight packages late. Fast Paks is better at delivering regular and overnight packages.

B) No. Super Ship only delivers 3% of its regular packages late, compared to Fast Paks, who deliver 4% of its regular packages late. Additionally, Super Ship only delivers 10% of its overnight packages late, compared to Fast Paks, who delivers 14% of its overnight packages late. Super Ship is better at delivering regular and overnight packages.

C) No. Fast Paks only delivers 0.09% of its packages late, compared to Super Ship, who delivers 0.06% of its packages late. Super Ship is better at delivering regular and overnight packages.

D) Yes. Fast Paks only delivers 0.06% of its packages late, compared to Super Ship, who delivers 0.09% of its packages late. Fast Paks is better at delivering regular and overnight packages.

E) No. This is an example of Simpson's paradox and unfair averaging. Since the overall percentages and the individual percentages disagree on which delivery service is better, both services can be considered equal. It cannot be determined whether Super Ship or Fast Paks deliver packages on time more often.

Answer: B

Diff: 2 Type: BI

Objective: (2.2) Interpret Case Involving Simpson's Paradox

39) An article in a magazine examined the graduate admissions process at a university for evidence of gender bias. The table below shows the number of applicants accepted to each of four graduate programs.

Students Accepted		
Program	Males accepted (of applicants)	Females accepted (of applicants)
	1 431 of 692	77 of 93
	2 268 of 414	27 of 36
	3 130 of 375	124 of 341
	4 14 of 233	17 of 205
	Total 843 of 1714	245 of 675

After reading this article, a classmate claims that there is gender bias because the university clearly accepted more males than females. Do you agree with your classmate? Explain.

- A) Yes. Overall, 49.2% of males were accepted, compared to 36.3% of females were accepted. The overall percentages are always the most valid comparison.
- B) No. Overall, 49.2% of males were accepted, compared to 36.3% of females were accepted. However, the comparison of the acceptance rate within each program shows that females had a higher acceptance rate for all four programs.
- C) Yes. Overall, 49.2% of males were accepted, compared to 36.3% of females were accepted. Additionally, the comparison of the acceptance rate within each program shows that males had a higher acceptance rate for all four programs.
- D) No. Overall, 49.2% of females were accepted, compared to 36.3% of males were accepted. Additionally, the comparison of the acceptance rate within each program shows that females had a higher acceptance rate for all four programs.
- E) No. This is an example of Simpson's paradox and unfair averaging. Since the overall percentages and the individual percentages disagree on which gender was favored, the study is useless. Nothing can be determined from these data.

Answer: B

Diff: 2 Type: BI

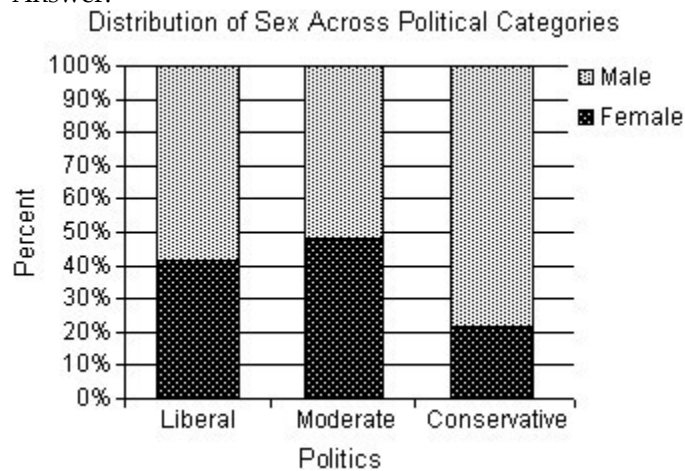
Objective: (2.2) Interpret Case Involving Simpson's Paradox

40) Students in a Political Science course were asked to describe their politics as "Liberal", "Moderate", or "Conservative." The results are listed in the table below.

		Politics		
Sex		Liberal	Moderate	Conservative
	Female	45	49	8
	Male	64	53	29
	Total	109	102	37

Create a segmented bar graph which shows the conditional distributions by gender for each political category.

Answer:



Diff: 2 Type: SA

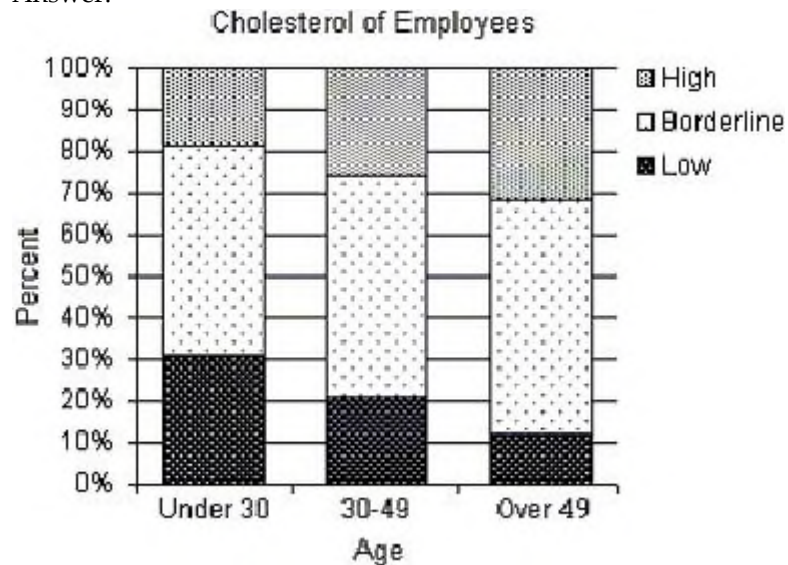
Objective: (2.2) Create a Graphical Display for Data II

41) A company held a cholesterol screening clinic for its employees. The results are summarized in the table below by age group and cholesterol level.

Cholesterol Level	Age		
	Under 30	30-49	Over 49
Low	31	38	24
Borderline	50	96	111
High	18	46	63

Create a segmented bar graph which shows the conditional distributions of cholesterol levels for each age group.

Answer:



Diff: 2 Type: SA

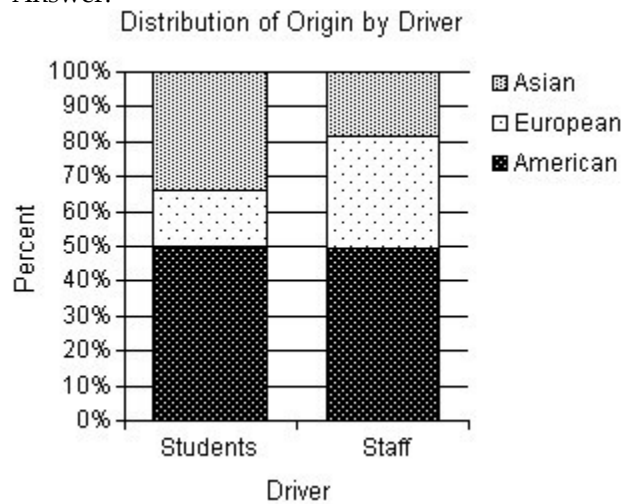
Objective: (2.2) Create a Graphical Display for Data II

42) A survey of automobiles parked in student and staff lots at a large university classified the brands by country of origin. The results are listed in the table below.

Origin	Driver	
	Student	Staff
North American	101	79
European	33	51
Asian	68	29

Create a segmented bar graph which shows the conditional distributions of origin for both students and staff.

Answer:



Diff: 2 Type: SA

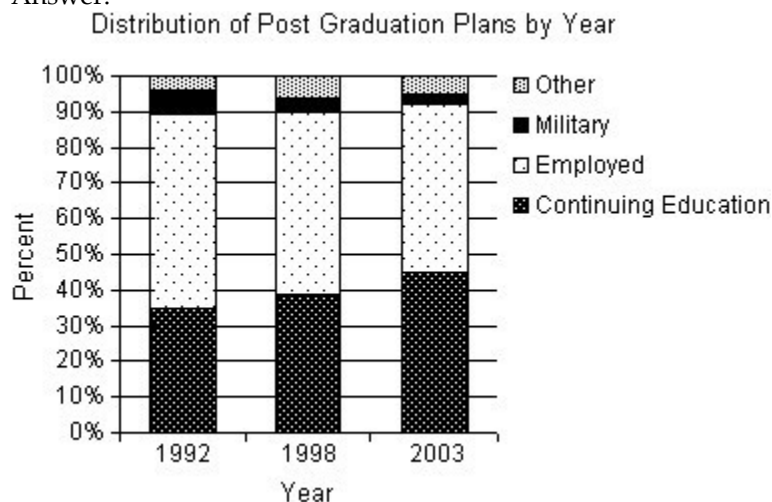
Objective: (2.2) Create a Graphical Display for Data II

43) The table compares what students at a Canadian college did after graduating in 1992, 1998, and 2003.

	Year		
	1992	1998	2003
Plans			
Continuing education	436	582	772
Employed	679	758	801
In the military	78	60	51
Other	52	92	87

Create a segmented bar graph which shows the conditional distributions of plans for each of the three years.

Answer:



Diff: 2 Type: SA

Objective: (2.2) Create a Graphical Display for Data II

44) From a sample of individuals the following percentages are reported:

- 22% of the individuals said they drink beer and wine.
- 12% of the individuals said they drink neither beer nor wine.
- 35% of the individuals said they drink beer.

Create a contingency table with percentages describing the relationship between beer and wine drinkers.

Answer:

	Drink Wine	Don't Drink Wine	Total
Drink Beer	22%	13%	35%
Don't Drink Beer	53%	12%	65%
Total	75%	25%	100%

Diff: 3 Type: SA

Objective: (2.2) Create a Contingency Table



45) From a sample of individuals the following percentages are reported:

- 75% of cat lovers prefer Brand 1 cola.
- 70% of dog lovers prefer Brand 1 cola.
- 55% of individuals that don't like cats or dogs prefer Brand 1 cola.
- 30% are cat lovers and 40% are dog lovers.

Create a contingency table with percentages describing the relationship between pet preference and cola preference.

Answer:

	Cat lover	Dog lover	Other	Total
Brand 1 Cola	22.5%	28.0%	16.5%	67.0%
Brand 2 Cola	7.5%	12.0%	13.5%	33.0%
Total	30.0%	40.0%	30.0%	100%

Diff: 3 Type: SA

Objective: (2.2) Create a Contingency Table